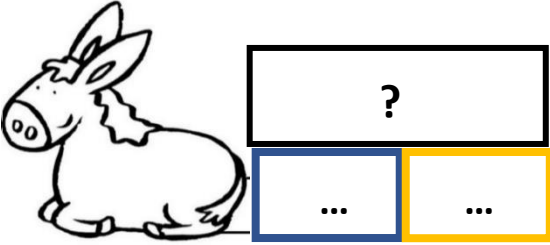
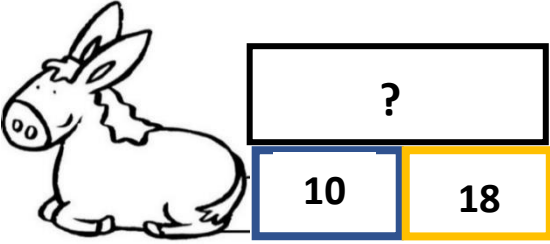
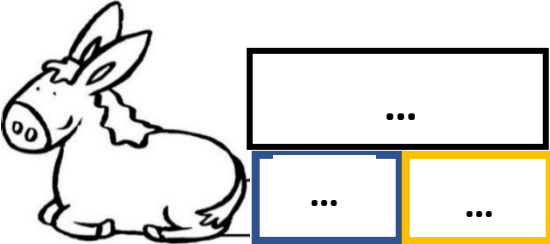
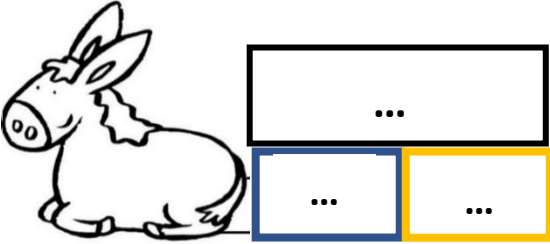


CE1-ACP8-fiche-élèves*-tableau à compléter

Texte du problème	Schéma du problème	Ecriture mathématique du problème	Nombre réponse au problème
		<p>.....</p>	<p>? = 20</p> <p>car</p> <p>12 + 8 = 20</p>
		<p>10 + 18 = ?</p>	<p>? = ...</p> <p>car</p> <p>.....</p>
		<p>5 + 25 = ?</p>	<p>? = ...</p> <p>car</p> <p>.....</p>
		<p>10 + 6 = ?</p>	<p>? = ...</p> <p>car</p> <p>.....</p>